

EXTRACT FROM LET'S PLAY PIANO: PART ONE

Quick quiz



You have learnt a lot so far but how well can you remember it all?
Try this quiz to test yourself.


1. Underneath each note write how many beats it should last:




MARKS

10

2. Name these notes (ie write the letter name underneath each note):





15



15

3. Give the name of these symbols:



12

4. Draw each of these notes:

a crotchet (quarter note)

13

a semibreve (whole note)

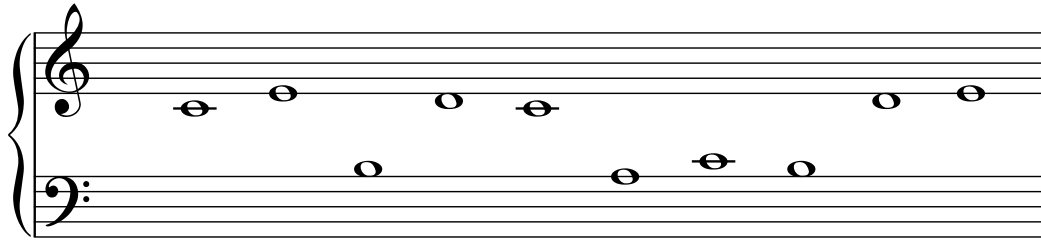
a minim (half note)

Total Marks 25

Quick Quiz




1. Name these notes:



MARKS

/10

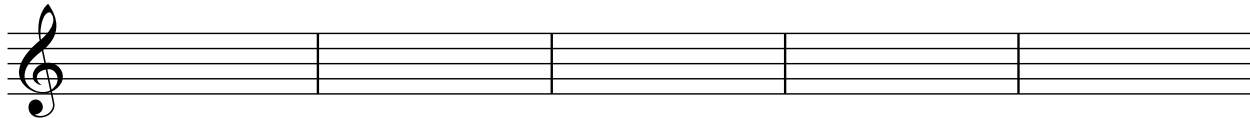
2. Write the correct finger numbers above these notes:



/10

3. Draw these notes in the treble clef:


a crotchet E a minim C a semibreve D a minim E a crotchet D



/10

4. Draw these notes in the bass clef:

a crotchet C a semibreve B a minim A a crotchet B a minim C



/10

5. Complete these musical sums (the first one has been done for you):

(i) $\text{crotchet} + \text{crotchet} = \text{minim}$

(iv) $\text{crotchet} + \text{crotchet} + \text{crotchet} + \text{crotchet} =$

(ii) $\text{crotchet} + \text{crotchet} =$

(v) $\text{minim} - \text{crotchet} =$

(iii) $\text{crotchet} + \text{crotchet} + \text{crotchet} =$

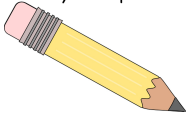
(vi) $\text{minim} - \text{crotchet} =$

/10

Total Marks /50

EXTRACT FROM LET'S PLAY PIANO: PART ONE

Find your pencil




Write in the note names



— — — — — — — —

Write in the note names




— — — — — — — —

Well done, you have now learnt 5 notes in the right hand!

They are C, D, E, F and G. But can you name them?

Here are the 5 notes you have learnt - write the name under each one


(the first 2 have been done for you).



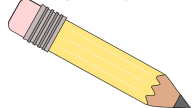
E F — — — — — — — — — — — — — —

EXTRACT FROM LET'S PLAY PIANO: PART ONE


You now know 5 left hand notes




Find your pencil



To help you to remember which note is which you should practise writing them here. (The first 2 have been done for you)



Complete these bars with notes and rests so that each bar has four beats.
(The first bar has been done for you.)



A musical score for the song 'Star of wonder, star of night'. It consists of two staves: a treble clef staff for the melody and a bass clef staff for the accompaniment. The lyrics are written below the notes.

Star of wonder, star of night,

EXTRACT FROM LET'S PLAY PIANO: PART ONE




MARKS

/4

Quick quiz

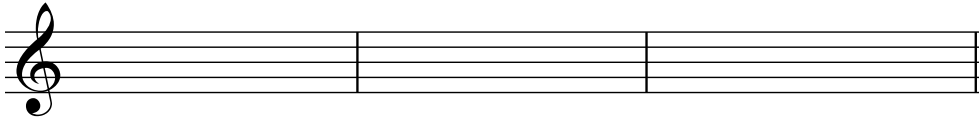
1. Draw these notes:

a crotchet D a minim E a dotted minim F a semibreve G



2. Draw these rests:

a crotchet a minim a semibreve



/3

3. How many beats are in each of these notes:

a crotchet (quarter note) =

a minim (half note) =

a semibreve (whole note) =

a dotted minim (dotted half note) =

/8

Total marks /15
